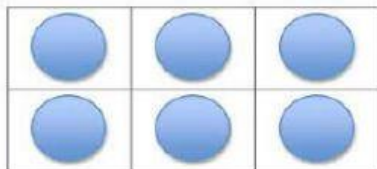


Date:

Name:

I. Use commutative property for the given array:

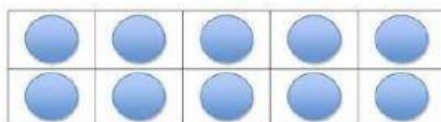
A.



Multiplication Equation: _____ \times _____ = _____

Multiplication Equation: _____ \times _____ = _____

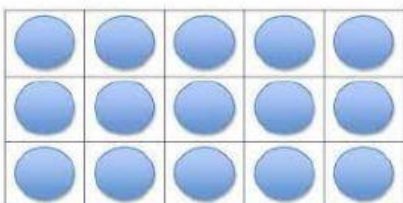
B.



Multiplication Equation: _____ \times _____ = _____

Multiplication Equation: _____ \times _____ = _____

C.



Multiplication Equation: _____ \times _____ = _____

Multiplication Equation: _____ \times _____ = _____

II. Find the missing numbers: (Use Commutative Property)

A. 2 X 9 AND 9 X _____

B. 3 X 8 AND 8 X _____

C. 5 X 4 AND 4 X _____

D. 6 X 3 AND _____ X 6