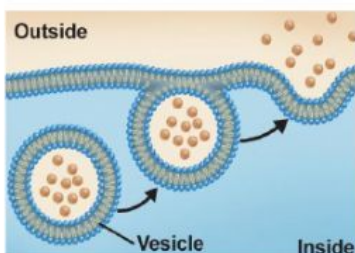
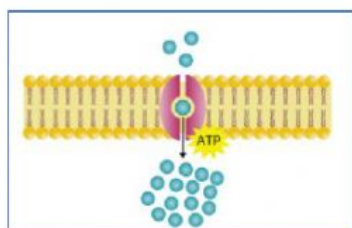
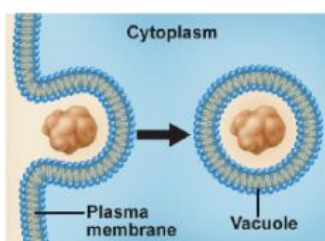


Active Transport

A. Select the correct option

1. Active transport is the movement of molecules from an area of _____ concentration to an area of _____ concentration.
2. Active transport moves materials _____ the concentration gradient.
3. Active transport _____ energy.

B. Match the type of transport shown in the image:



a. Exocytosis

b. Carrier-assisted transport

c. Endocytosis

d. Facilitated Diffusion