

Name: _____

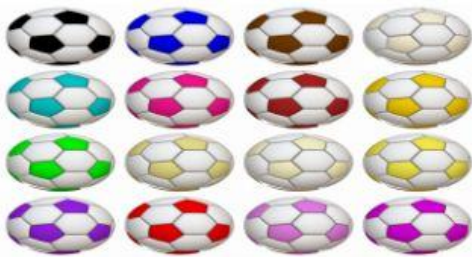
MATH

1. Count the objects then click the correct number.



10 8 12

2. Which set of objects is 16?



3. Click the number that teacher will say.

15 9 20

4. Count and click the correct number.



7 11 6

5. Click the number that teacher will say.

22 18 10

6. Click the TALLEST tree.



7. Which ant is SMALLER?





8. Look at the pictures. Which is LONGEST ?



9. Which is the BIGGEST ball?



10. Which of the following arranged from smallest to biggest?



11. Click the HEAVIER object.



12. Which pictures arranged from long to longest?



13. What is the missing number in ? 50 ____ 52 53.

41 51 55

14. What number is next after 35 36 ____ ?

35 36 37

15. What is the number before ____ 79 80 81?

68 58 78

Get your white board and marker then write the number that teacher will say. (5pts.)