
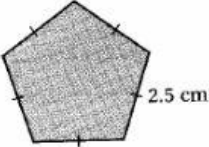


**BAHAGIAN B**

- 6 (a) Tuliskan **Benar** atau **Palsu** bagi perimeter setiap poligon berikut.  
 Write **True** or **False** for the perimeter of each of the following polygons.

[2 markah/marks]

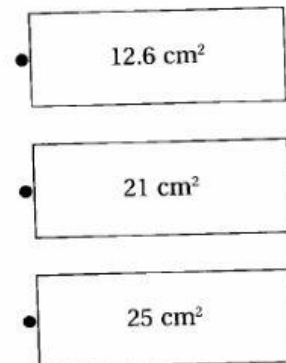
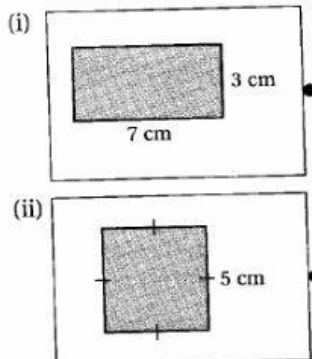
Jawapan/Answer:

Poligon/Polygon	Perimeter	Benar/Palsu True/False
(i) 	12 cm	
(ii) 	15 cm	

- (b) Padankan setiap bentuk berikut dengan luas yang betul.  
 Match each of the following shapes with the correct area.

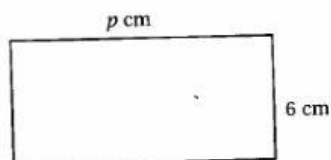
[2 markah/marks]

Jawapan/Answer:



**BAHAGIAN C**

- 7 (a) Rajah 5 menunjukkan seutas dawai yang dibengkokkan menjadi sebuah bingkai berbentuk segi empat tepat.  
 Diagram 5 shows a piece of wire that is bent into a rectangular frame.



Rajah 5/Diagram 5