

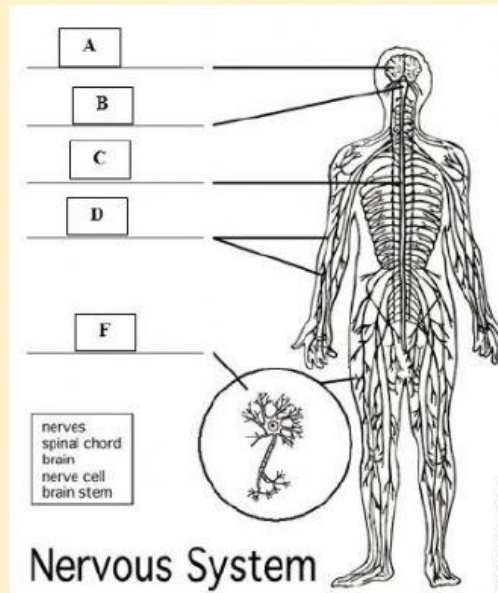
Science

The Nervous System



Instructions:

Use the diagram to answer questions 4 to 8.



1. The _____ is responsible for all the activities of your body.

2. Which are NOT part of the nervous system?

A. brain B heart C. nerves

3. _____ receives information from various parts of the body.

4. Which part of the diagram is labeled D?

Nerves Spinal cord Brain

Nerve cell Brain Stem

5. Which part of the diagram is labeled B?

Nerves Spinal cord Brain

Nerve cell Brain Stem

6. Which part of the diagram is labeled A?

Nerves Spinal cord Brain

Nerve cell Brain Stem

7. Which part of the diagram is labeled F?

Nerves

Spinal cord

Brain

Nerve cell

Brain Stem

8. Which part of the diagram is labeled C?

Nerves

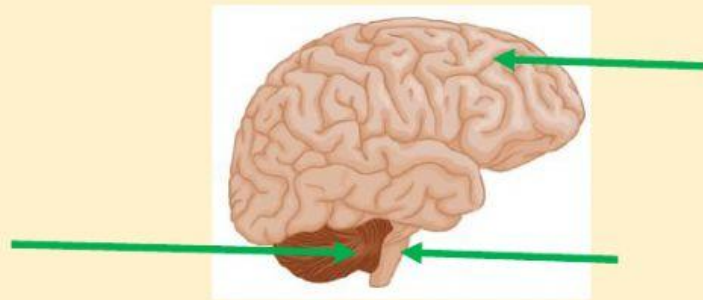
Spinal cord

Brain

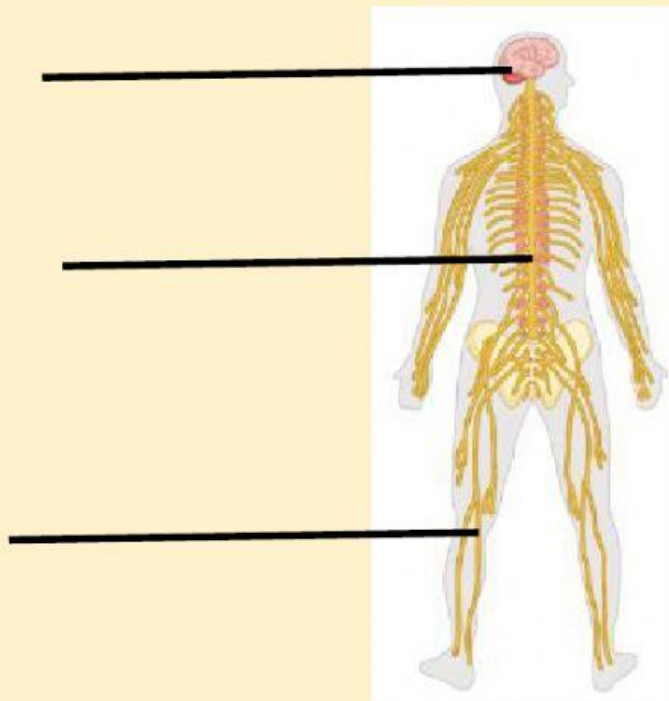
Nerve cell

Brain Stem

Instructions: Choose the correct name for the parts of the brain.



Instructions: Use the words and drag them to match the parts on the nervous system



spinal cord

nerves

brain