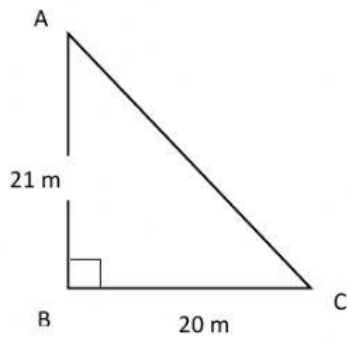


Exercise

Name:- _____

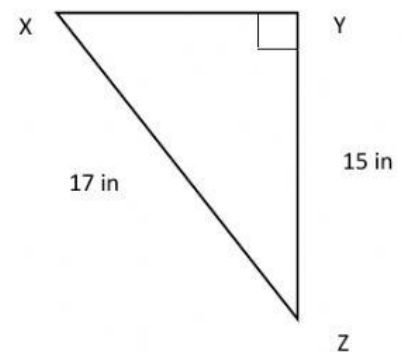
Find the unknown sides in the triangles below.

1)



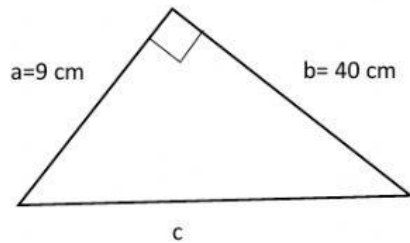
$$\overline{AC} = \underline{\hspace{1cm}} \text{ m}$$

4)



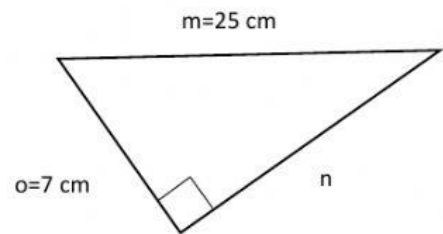
$$\overline{XY} = \underline{\hspace{1cm}} \text{ in}$$

2)

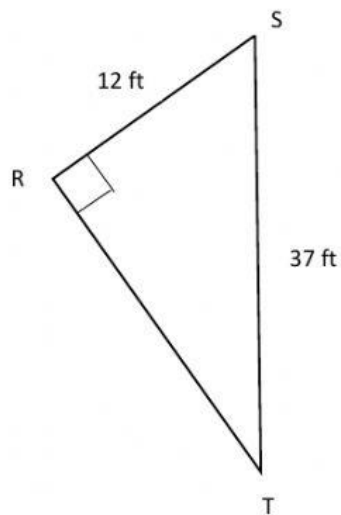


$$c = \underline{\hspace{1cm}} \text{ cm}$$

5)



$$n = \underline{\hspace{1cm}} \text{ cm}$$



$$\overline{RT} = \underline{\hspace{1cm}} \text{ ft}$$