


Name: _____ Year: _____

Practice 1 Finding Volumes of Liquids

1. Which container has a greater volume of water?
Fill in the blanks.

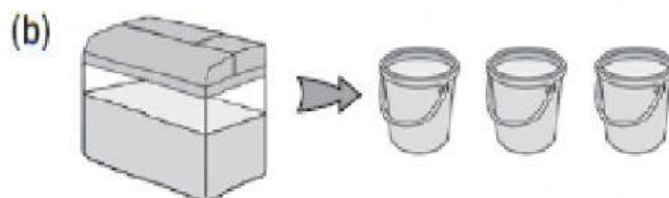


Beaker A

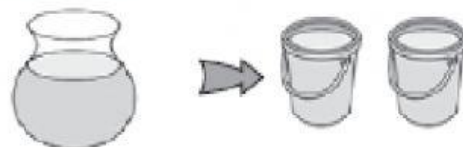


Beaker B

The volume of water in Beaker is greater than
the volume of water in Beaker .



Container C



Container D

The volume of water in Container is less than
the volume of water in Container .

2. Fill in the blanks.



Bottle A



Bottle B



Bottle C

(a) Bottle A contains glasses of water.

(b) Bottle B contains glasses of water.

(c) Bottle C contains glasses of water.

(d) Arrange the bottles in order of the volume of water they contain. Begin with the smallest volume.

Bottle , Bottle , Bottle
smallest