

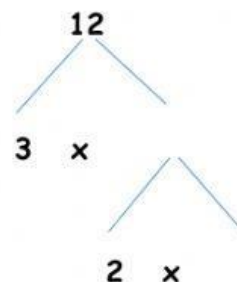
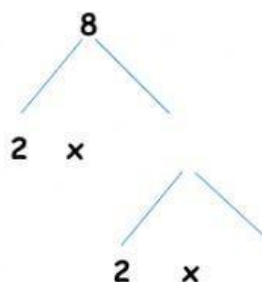
Name: _____ Score: _____

Date: _____

Mathematics
Greatest Common Factor

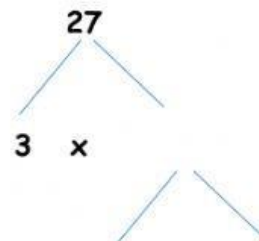
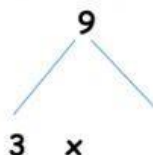
Find the greatest common factor for the following using the factor trees. Fill in the blanks. 1 point each.

1.



GCF _____

2.



GCF _____

Mrs. Lucy S. Cunningham
The Bahamas 