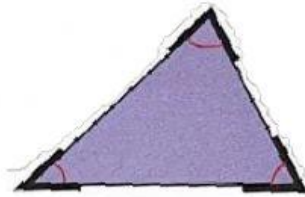


TOPIC: IDENTIFYING ANGLES

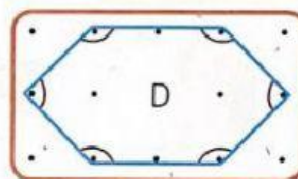
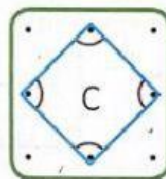
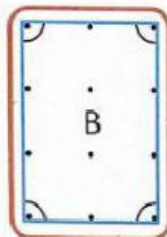
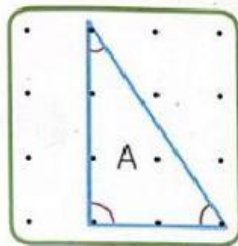
(1) Angles can be found in shapes. Look at the rectangle, square and triangle. How many angles does each shape have?







(2) How many sides and angles does each figure have?



a. Figure A has sides and angles.

b. Figure B has sides and angles.

c. Figure C has sides and angles.

d. Figure D has sides and angles.

(2) How many sides and angles does each shape have?

SHAPES	SIDES	ANGLES
