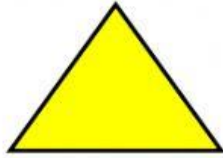





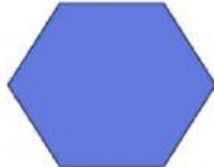









EXERCISE 1: Match the shapes with its name.



Shape's Name
square
parallelogram
triangle
rectangle
hexagon
circle
trapezium

shapes








EXERCISE 2: Click on the correct name for each shape below.

 <div data-bbox="523 268 805 362">Trapezium</div> <div data-bbox="523 398 805 481">Circle</div>	 <div data-bbox="1157 268 1439 362">Triangle</div> <div data-bbox="1157 398 1439 481">Rectangle</div>
 <div data-bbox="523 566 805 660">Square</div> <div data-bbox="523 696 805 790">Hexagon</div>	 <div data-bbox="1157 566 1439 660">Trapezium</div> <div data-bbox="1157 696 1439 790">Square</div>
 <div data-bbox="502 902 785 985">Circle</div> <div data-bbox="502 1021 785 1115">Triangle</div>	 <div data-bbox="1149 936 1431 1030">Rectangle</div> <div data-bbox="1077 1066 1449 1171">Parallelogram</div>
 <div data-bbox="625 1317 906 1411">Square</div> <div data-bbox="563 1447 933 1556">Parallelogram</div>	