
	MID-SEMESTER EXAMINATION PAPER ACADEMIC YEAR 2021/2022	
	Subject : Geography	Name :
	Primary : 5	Day/ Date :




- Here is the one of the air pollution from motor vehicles....
 - Soot
 - Carbon Monoxide
 - Nitrogen monoxide
 - All correct
- Based on the picture above, the problem that commonly happens on the road is...
 - Crashing car
 - Air pollution
 - traffic jam
 - All correct
- The cause of the traffic jam is...
 - There is no traffic control
 - The driver doesn't have driver's license
 - The driver drive slow
 - All correct
- Here is the effect of traffic in town, except ...
 - Human health
 - Damage for environment
 - Non-renew fuel
 - All correct
- What is the best transportation do we use if we go from Kenya to Madagaskar....
 - Airplane
 - Ferry
 - bus
 - All correct
- What is the best transportation do we use if we go from Mozambik to Malawi....
 - Airplane
 - Ferry
 - Bus/ car
 - All correct



7. Here is the way to solve the traffic problems... except
- Using Bicycle
 - Subway /bus
 - using train
 - Car and motor cycle
8. The benefit of using Bicycle is.... Except
- Healthy
 - On time and fast
 - Good for environment
 - cheap
9. The disadvantage of using Bicycle is.....
- On time
 - Fast
 - cheap
 - Not comfortable with the bad weather
10. The benefit of using ship... except
- Carry lots of people
 - Carry lots of cargo
 - Slow and just port to port
 - All correct



SECTION B

No	Picture	Advantage	Disadvantage
1			
2			
3			

4			
5			


Selection C

1. Please List the traffic problems in the road!

2. How to solve traffic problems?

3. Write the list of old transportations

4. Explain the function of these traffics control?

 <p>Lower speed limit</p> <p>No parking</p>	
--	--

5. Why do people transport?

--