

## SOCIAL SCIENCE 4: POPULATION 1




1.- Complete using these words: emigration, mortality, immigration, inhabitants, natality.

- The population of a place is the number of \_\_\_\_\_ in that place.
- The population of a place changes with the births, deaths, the \_\_\_\_\_ and the \_\_\_\_\_.
- The \_\_\_\_\_ or birth rate is the number of babies born in a place in one year.
- The \_\_\_\_\_ or death rate is the number of deaths in a place in one year.

2. In Valdesilla de la Mesa, in 2019 were born 35 children and 20 people died. What was the natural growth in this village in 2019?

55                      +15                      -15                      -55                      3,5                      25,3

3.- Search in this link: [POBLACIÓN POR MUNICIPIOS Y PROVINCIAS](https://inec.es/web/guest/poblacion-por-municipios-y-provincias)

		
THE PROVINCE OF LEÓN	LEÓN CITY	VALDEFRESNO

4.- Match the definition with the concept.

- |   |             |
|---|-------------|
| - New babies are born                             | Mortality   |
| - Some people die                                 | Emigration  |
| - New people come to live to León                 | Immigration |
| - Some people leave León to live in another place | Natality    |

5.- In Campo de la Tablet there were 437 inhabitants in 2018. In 2019, 25 children were born, 10 people died, 8 new people came to live there (vinieron a vivir allí) and 5 left the village (se fueron del pueblo). How many inhabitants were in Campo de la Tablet at the end of 2019?

6) Look at this graph and choose the right option:

	2019	2018	2017	Total 2016
24089 León	124.303	124.772	125.317	126.192

a) The population in León \_\_\_\_\_.

b) Select the options that you think happened in León

A lot of new people come to live to León. Not many left.

Lots of people went to live to other cities.

A lot of babies were born. Not many died.

A lot of people died. Not many were born.

7) GRAPHS (gráficos): Book. page 92.

What type of graph are these ones?

<p>Cifras Oficiales de Población de los Municipios Españoles: Revisión del Padrón Municipal, 24089 León, Total</p> <p>The line graph shows a steady decline in population from 2013 to 2019. The y-axis represents population from 123,791 to 130,901. The x-axis shows years from 2013 to 2019. The population starts at approximately 130,901 in 2013 and drops to about 123,791 by 2019.</p>	<p>World Population Percentages (2017)</p> <p>The pie chart shows the distribution of world population by country in 2017. China is the largest at 18.5%, followed by India at 17.9%, the U.S. at 4.3%, and others at 29.8%.</p>
<p>IT'S A _____</p>	<p>IT'S A _____</p>
<p>Estadística del Padrón Continuo, Edad (grupos quinquenales), 24 León, TOTAL, Ambos sexos, 2019</p> <p>The bar chart shows population by age group in León for 2019. The y-axis represents population from 0 to 25,001. The x-axis shows age groups from 0-4 to 75+ years. The population peaks in the 45-49 age group at approximately 24,000.</p>	<p>Icon-based representation of population for France, Italy, Spain, Germany, and Portugal. Each icon represents a person. France has 5 icons, Italy has 6, Spain has 3, Germany has 8, and Portugal has 2.</p>
<p>IT'S A _____</p>	<p>IT'S A _____</p>