

PENTAKSIRAN BERASASKAN BILIK DARJAH (PBD)
MATHEMATICS YEAR 1
SECTION B

(10 marks)

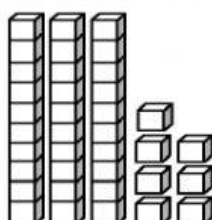
1. a) Write the number in word.

54 = Answer:

- b) Round off the numbers below to the nearest ten. Match.

24	<input type="text" value="10"/>
36	<input type="text" value="20"/>
12	<input type="text" value="40"/>

- c) Count the small blocks and fill in the blanks.

 tens and ones is

- d) Write the place value and digit value of the underlined digit.

62 Place value :
Digit Value :

- e) Complete the following number patterns.

(7 marks)

2. a) Fill in the missing number in the box below.

(i)

$$\begin{array}{r} 30 \\ + 4 \square \\ \hline 76 \end{array}$$

(ii)

$$\begin{array}{r} 17 \\ + \square 5 \\ \hline 52 \end{array}$$

b) Tick (/) the correct number sentence.

Jasmine bought 18 exercise books.
He used 9 of them.
How many books were not used?

<input type="checkbox"/>	$9 + 9 = 18$
<input type="checkbox"/>	$18 - 9 = 9$
<input type="checkbox"/>	$9 - 9 = 0$

c) Fill in the blanks with the correct number.



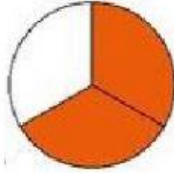
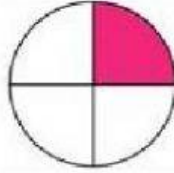
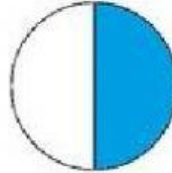
There are groups of twos.

+ + + =

d) Fill in the blanks correctly.

$$\begin{array}{r} 50 \\ - 34 \\ \hline \square \square \\ \hline \end{array}$$


3. a) Which is $\frac{1}{4}$? Tick (/) the correct answer.


☐

☐

☐

- b) Write the correct answer in the box.

Three quarters = $\frac{3}{\square}$

- c) Match.



- d) What is the time? Choose the correct answer.





