


0 1 2 3 4 5 6 7 8 9 10 11 12 13 14 15 16 17 18 19 20

I count the red dots and write how many. I count the black dots and write how many. I calculate how many dots altogether and write the total number.


أَعِدُّ النِّقَاطَ الْحُمْرَاءَ، وَأَكْتُبِ الْعَدَدَ، وَأَعِدُّ
النِّقَاطَ السَّوَدَاءَ، وَأَكْتُبِ الْعَدَدَ. أَحْسِبْ
مَجْمُوعَ النِّقَاطِ، وَأَكْتُبِ النَّاتِجَ.



Red circle:

Black circle:

Yellow circle:



Red circle:

Black circle:


Yellow circle:



Red circle:

Black circle:

Yellow circle:



Red circle:

Black circle:


Yellow circle:



Red circle:

Black circle:

Yellow circle:



Red circle:

Black circle:

Yellow circle: