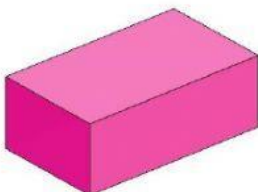





Name the 3-Shapes

Match the correct figure to its name:



Cylinder

Pyramid

Cuboid

Cone

Cube

Sphere

Triangular
based prism