




## Count & Compare



How many  ? \_\_\_\_\_

How many  ? \_\_\_\_\_

How many  ? \_\_\_\_\_


How many  ? \_\_\_\_\_

Which animal has the most? \_\_\_\_\_



Which animal has the least? \_\_\_\_\_



Look at picture in the big circle. write < , = or > for each equation. Use the number animal pictures to help



\_\_\_\_\_



\_\_\_\_\_

