

Dowroong Wittaya School

Final Test

Semester 1

Academic year: 2021-2022

Course No.: _____

Course Title: Science

Class: P 3/1

Name: _____

Number: _____

A. Write A, B, C to group the animals below according to the food they eat.

A.

Herbivores

B.


Carnivores

C.

Omnivores

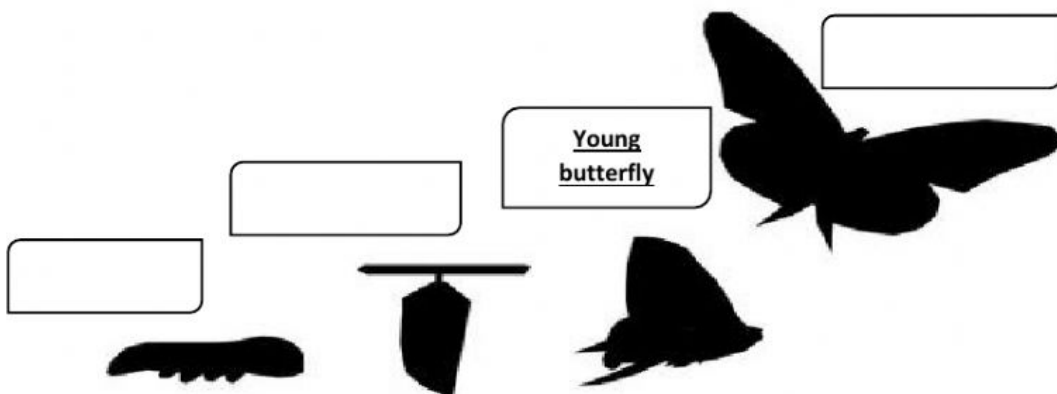


C



B. Fill out the boxes according to the life cycle stages of a butterfly.

Life Cycle of a butterfly



C. Group the following food according to its content.

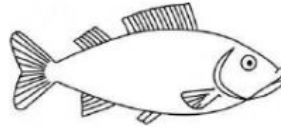
CARBOHYDRATES	PROTEINS	VITAMINS and MINERALS
1. Rice	1. Meat	1. Spinach
2.	2.	2.
3.	3.	3.
4.	4.	4.



Spinach




Mango



Fish



Carrot




Eggs



Cabbage



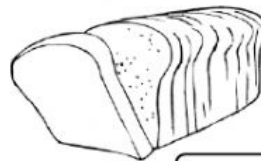
Noodles



Potato



Milk



Bread