









Add or Subtract. (Drag the ice cream top to the correct place.)

1. <div></div> 	2. <div></div> 	3. <div></div> 	4. <div></div> 
5. <div></div> 	6. <div></div> 	7. <div></div> 	8. <div></div> 



Read and answer the word problem below. (Choose and click the correct answers.)

- 1. Ain ate 7 sweets on Monday.
She ate 12 sweets on Tuesday.
How many sweets did she eat altogether in the two days?**

a) $12 - 7 = 5$

She ate 5 sweets in two days.

b) $7 + 12 = 19$

She ate 19 sweets in two days.

- 2. Faris had 18 rulers.
He gave 7 rulers to his friends.
How many rulers did he have left?**

a) $18 - 7 = 11$

He had 11 rulers left.

b) $18 + 7 = 25$

He had 25 rulers left.