

NATURAL SCIENCE

Unit 8 Energy




1. Write in the rubbish bin the odd one out. Then, write the corresponding form of energy of the other ones.

a. kite	bike	computer	skateboard
b. radiator	the Sun	blender	fire
c. water	batteries	food	fuel
d. star	candle	snow	torch




- a.
- b.
- c.
- d.

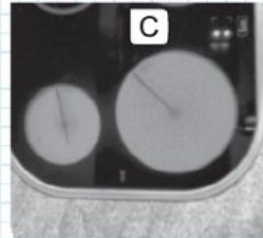
2. Match each picture to its corresponding energy transformation.



A



B



C



D

☐
☐
☐
☐

chemical energy → mechanical energy

chemical energy → thermal energy

electrical energy → mechanical energy

electrical energy → thermal energy



GENIAL