

Name: _____ {IP}

Comparing Numbers

_____/10

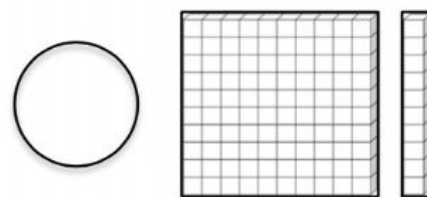
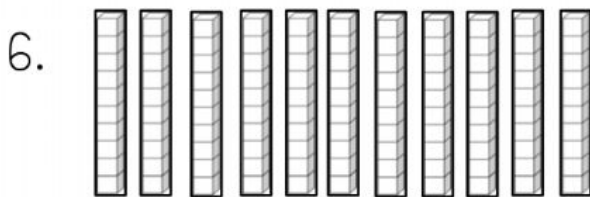
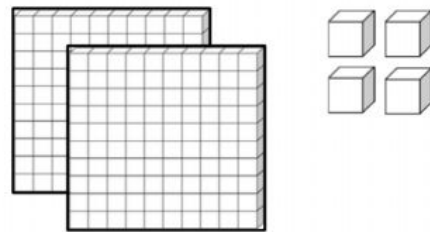
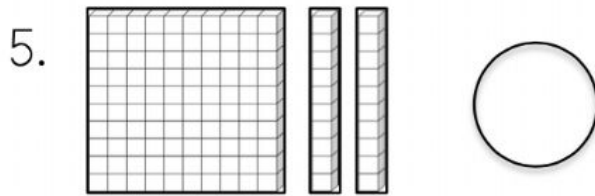
Fill in the circles with $>$, $<$, or $=$.

1. 362 ○ 263

3. 442 ○ 442

2. 190 ○ 129

4. 148 ○ 184



7. $600 + 50 + 4$ ○

$500 + 90 + 9$

8. $300 + 60 + 7$ ○

$600 + 70 + 3$

9. Circle the greater number.

908

930

Explain in words how you know this is the greater number.

