


Name _____




Subtraction on the Ranch!


Directions: Cross out pictures to solve the equation.
Then write the answer in the circle.




$$8 - 2 = \bigcirc$$




$$4 - 3 = \bigcirc$$




$$6 - 4 = \bigcirc$$



$$2 - 0 = \bigcirc$$



$$5 - 2 = \bigcirc$$




$$7 - 3 = \bigcirc$$

Name _____




Subtraction with Cats!


Directions: Cross out pictures to solve the equation.
Then write the answer in the circle.




$$6 - 3 = \bigcirc$$




$$9 - 4 = \bigcirc$$




$$5 - 1 = \bigcirc$$



$$4 - 4 = \bigcirc$$



$$8 - 6 = \bigcirc$$




$$7 - 5 = \bigcirc$$


Name _____

Subtraction with Mice!

Directions: Cross out pictures to solve the equation.
Then write the answer in the circle.



$$4 - 1 = \bigcirc$$




$$9 - 3 = \bigcirc$$



$$6 - 5 = \bigcirc$$



$$3 - 2 = \bigcirc$$



$$8 - 3 = \bigcirc$$



$$5 - 0 = \bigcirc$$