





Name: _____ Grade 1: ____

Circle the correct answers

1. _____ are how something looks, feels, smells, sounds and tastes
 - a. Temperature
 - b. Properties
 - c. Shadows
2. Wood , plastic, rubber and metal are examples of:
 - a. Materials
 - b. Liquids
 - c. Gases
3. A _____ makes smaller things look larger?
 - a. Ruler
 - b. Thermometer
 - c. Hand lens
4. When a solid object blocks the light it is called a:
 - a. Shadow
 - b. Property
 - c. Liquid

5

Match the tools with their function.

| | | |
|---|--|---------------------------|
|  Ruler | | Measures the temperature. |
|  Balance | | Makes things bigger |
|  Thermometer | | Measures length. |
|  | | Measures mass. |

6

Fill in the correct answer

| | | | |
|--------------|---------------|---------------|--------------|
| <u>Gases</u> | <u>Liquid</u> | <u>Matter</u> | <u>Solid</u> |
|--------------|---------------|---------------|--------------|

1. All things are made of _____.

2. A _____ does not have its own shape.

3. A _____ has a shape of its own.

4. The air is made of different _____.