



54pts

MATH
READINESS TEST FOR FOURTH GRADE
First Semester

Name: _____ Date: _____

A. Select the correct writing for the following numbers in word form. (4pts)

a) 1,248

1. one hundred, two hundred forty eight

2. One thousand, two hundred forty-eight

b) 5,790

1. five thousand, seven hundred ninety

2. Five hundred, seven thousand ninety

B. Select the correct form of the following numbers in standard form. (4pts)

a) Two thousand, five hundred one 2,501

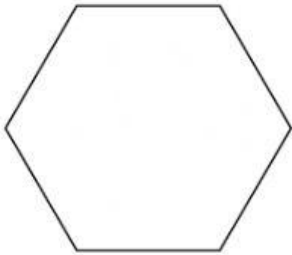
2,510

b) Seven hundred twenty three 7,123

723

H. Classify the following polygons into a: triangle, quadrilateral, pentagon, hexagon, or octagon. Write the name on the lines provided. (5pts)

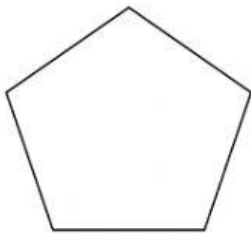
1)



2)



3)



4)

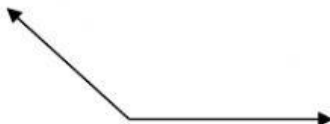


5)

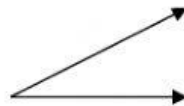


I. Write the name of each angle: right, acute, or obtuse. Write it on the lines provided. (3pts)

1)



2)



3)

