






Lancer's Convent
Maths Worksheet- Class II

Watch the given video.

Q1. Match the given numbers with their sum.

$9 + 9 =$	14
$12 + 2 =$	17
$10 + 7 =$	20
$17 + 3 =$	18
$25 + 5 =$	30

Q2. Given below are the total. Drag and drop the total at the correct place

$\begin{array}{r} 45 \\ + 29 \\ \hline \end{array}$	$\begin{array}{r} 66 \\ + 45 \\ \hline \end{array}$	$\begin{array}{r} 49 \\ + 34 \\ \hline \end{array}$	$\begin{array}{r} 105 \\ + 368 \\ \hline \end{array}$	$\begin{array}{r} 575 \\ + 227 \\ \hline \end{array}$
				

Total

473

111

74

802

83

Q2. Drag the total and drop it at the correct place.