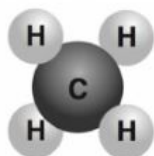
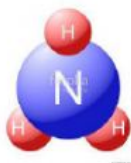
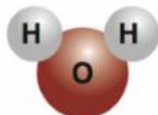
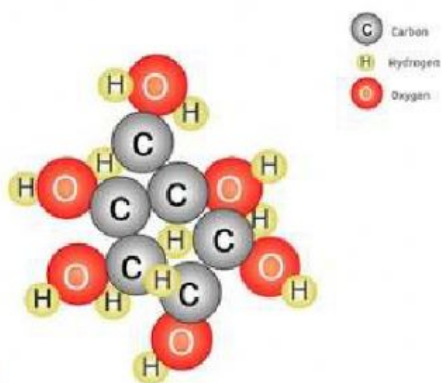


Match the formula to the diagram of the molecule



Complete the table using the picture of glucose

Glucose
molecule
model



Symbol	element	Number of atoms
	Carbon	
	Hydrogen	