

Unit Review

Read the questions below. Choose the correct answer (A, B, C or D) and write it in the space provided.

1. Which of the following shows the correct stages in the life cycle of a cockroach?

A.



C.



B.



D.



2. What is the name given to a young cockroach?

- A. caterpillar
- B. nymph

- C. tadpole
- D. pupa

3. What is the name given to a young frog?

- A. tadpole
- B. caterpillar



- C. nymph
- D. pupa

4. How many stages are there in the life cycle of a tiger?

- A. one
- B. three

- C. two
- D. four

5. Which of the following shows the correct stages in the life cycle of a butterfly?

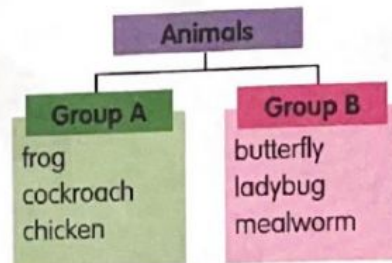


6. Which of the following animals does not reproduce by laying eggs?



Questions 7 and 8 are based on the chart below.

The animals in the chart below have been classified by the number of stages in their life cycles.



7. Which animal could also be classified into Group A?

- A. fish
- B. mosquito
- C. chimpanzee
- D. turtle

8. Which animal could also be classified into Group B?

- A. fish
- B. mosquito
- C. turtle
- D. chimpanzee

9. Which of the following shows the correct stages in the life cycle of a mosquito?

