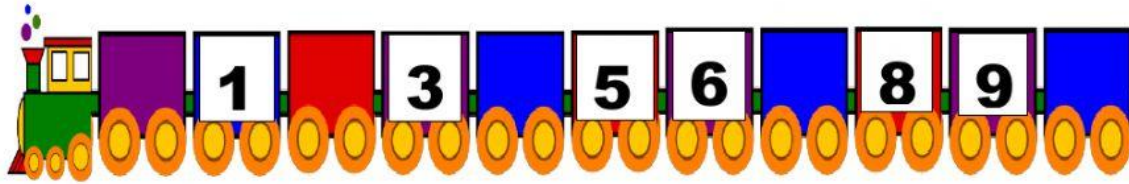







Number Sense

 Fill in the missing numbers. (5points)



 Count and write the amount. (1 point each)

 Choose the correct number. (1 point each)

What number comes after 4. <div style="display: flex; justify-content: space-around; font-size: 2em; margin-top: 10px;"> 5 0 7 </div>
What number comes between 8 and 10. <div style="display: flex; justify-content: space-around; font-size: 2em; margin-top: 10px;"> 3 9 5 </div>
What number comes before 7. <div style="display: flex; justify-content: space-around; font-size: 2em; margin-top: 10px;"> 1 4 6 </div>