



DELHI PUBLIC SCHOOL NEWTOWN
SESSION 2021-2022
MATHEMATICS WORKSHEET
3D – SHAPES

CLASS-I

NAME - _____

SEC - _____

DATE- _____

I. Match each name to the picture that best represents it.

• cone



• cube



• sphere



• cylinder



• cuboid






DELHI PUBLIC SCHOOL NEWTOWN
SESSION 2021-2022
MATHEMATICS WORKSHEET
3D - SHAPES

CLASS- I
NAME - _____

SEC - _____
DATE- _____

SOLID SHAPES

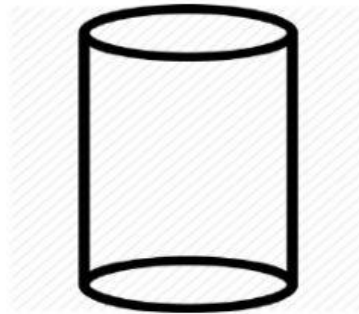


CUBE

Faces _____

Edges _____

Vertices _____




CYLINDER

Flat faces _____

Curved face _____

Vertices _____

Edges _____



CONE

Flat faces _____

Curved face _____

Vertex _____

Edge _____




SPHERE

Curved face _____

Edges _____

Vertices _____



CUBOID

Faces _____

Edges _____

Vertices _____




DELHI PUBLIC SCHOOL NEWTOWN
SESSION 2021-2022
MATHEMATICS WORKSHEET
2D - SHAPES

CLASS- I
NAME - _____

SEC - _____
DATE- _____


2D SHAPES



CIRCLE

Sides _____


Vertices _____



SQUARE

Sides _____

Vertices _____



RECTANGLE

Sides _____


Vertices _____



TRIANGLE

Sides _____

Vertices _____



OVAL

Sides _____

Vertices _____



DELHI PUBLIC SCHOOL NEWTOWN
SESSION 2021-2022
MATHEMATICS WORKSHEET
2D SHAPES

CLASS- I

NAME - _____

SEC - _____

DATE- _____

WHICH 2D SHAPE AM I?

I have four sides
and four corners.
All my sides are of
equal length.

I have three
sides and three
corners.

I am round and
curvy. I have no
sides and no
corners.

I have four sides and
four corners. My
opposite sides are of
equal length.

I am the shape of
an egg.
I have no corners.

oval

square

triangle

circle

rectangle