



WAT KHIEH KHET SCHOOL

Final Test Program: MEP Prathom 1/1

Semester: 1/2564 Subject: Science

Name: _____ No: _____

Part A: Multiple Choice

Directions: Choose and write the correct letter on the space provided.

_____ 1. What parts of the body is used to see things around us?



_____ 2. What is the used of the ear?

a. To see

b. To hear

c. To walk

_____ 3. What parts of the body that you use to smell or breathe?



_____ 4. Which parts of the body do you used to *breathe and eat*?

a. Eye and nose

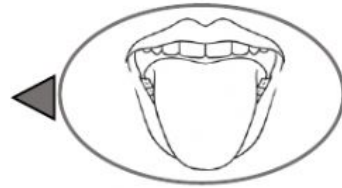

b. mouth and ear

c. nose and mouths

_____ 5. What parts of the body that we used for hearing?



Part B. Direction: Match each sense to the correct part of the body.



Part C: Animals

Direction: Write the correct name of each animals on the space provided.


frog	monkey	chicken	deer	dog
------	--------	---------	------	-----



11.



12.



13.



14.

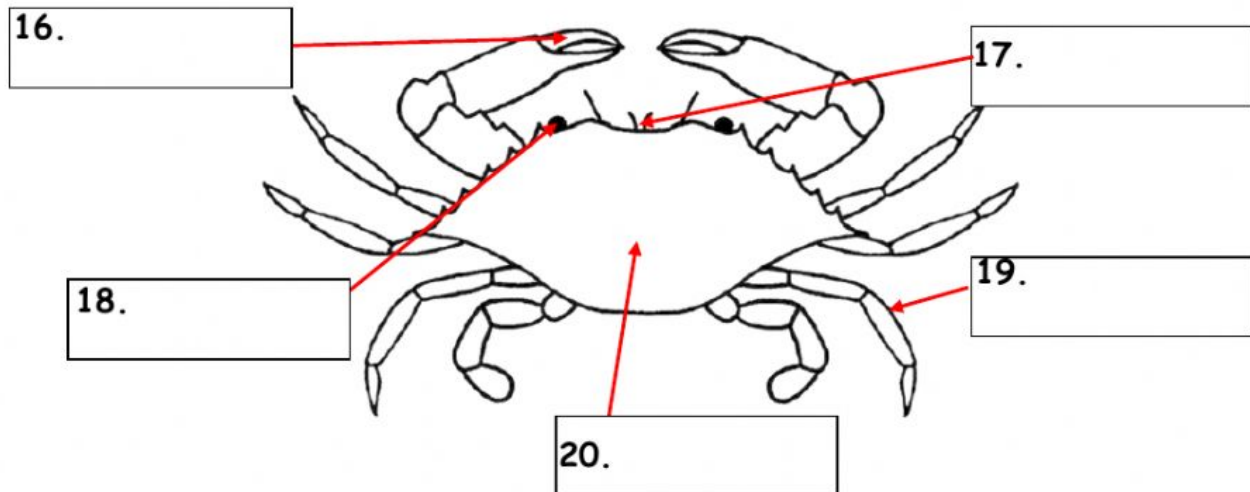


15.

Test D. Parts of Animals

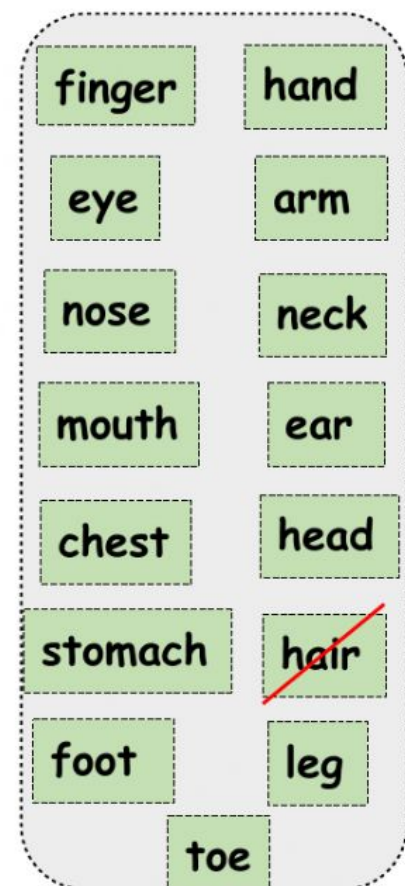
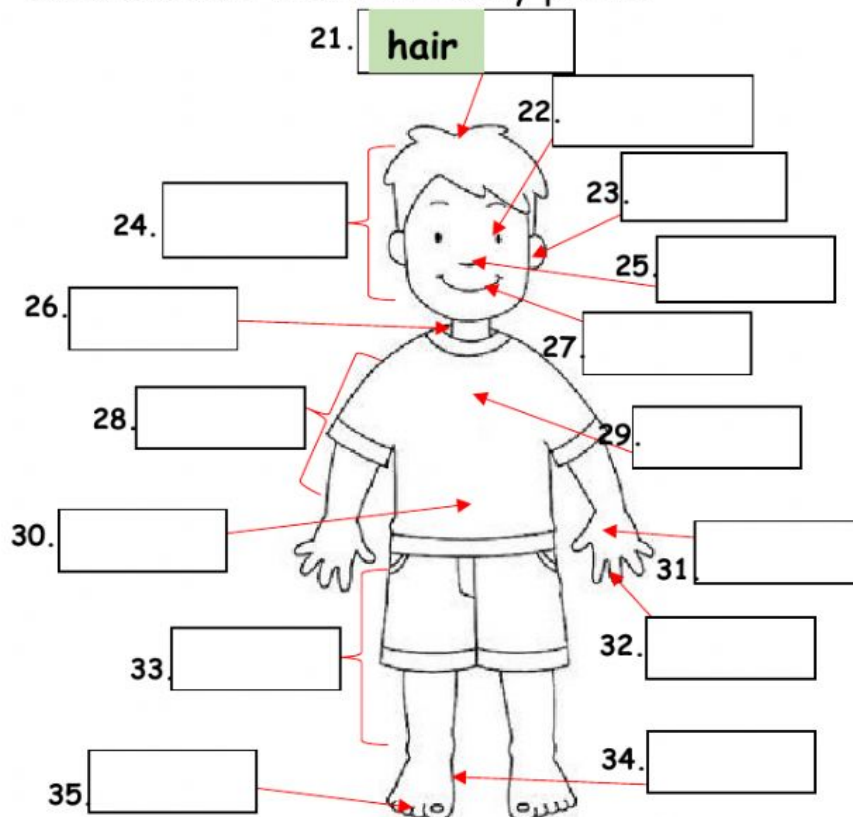
A.Direction: Label the correct body parts of the crab.

mouth	pincer	shell
leg	eye	




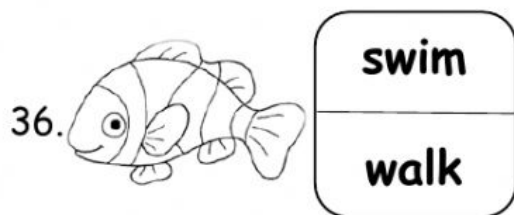


Test E. Parts of the Body

A.Direction: Label the body parts.



Part F. Direction: *Choose the correct movements of the following animals.*



Part G. Direction: *Where do the animals live? Choose the correct answer.*

