

Year 4 Math Term 1 Week 7
Topic: Fractions

LO: To identify fractions in the given diagrams.


1. What fraction of this shape is shaded?



—




2. What fraction of this shape is shaded?



—




3. What fraction of this shape is shaded?



—



4. What fraction of this shape is shaded?



—



5. There are 29 children in a class. 14 of them like playing football. What fraction of the class like playing football?



—



6. Augustus buys a bag of 713 Rainbow Sweets. 49 of them are red. What



—



fraction of the sweets are red?

7. There are 7 weekly episodes of Lily's favorite soap opera. One week she misses 4 of them. What fraction of the episodes has she missed that week?

—

8. A farmer has 307 ewes. In the spring, 205 of them give birth to twins. What fraction of the ewes give birth to twins?

—

9. What fraction of this shape is not shaded?



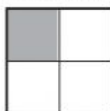
—

10. What fraction of this shape is not shaded?



—

11. What fraction of this shape is not shaded?



—

12. What fraction of this shape is not shaded?



—

13. Max has 15 toy cars. 8 of them are broken. What fraction of the toy cars are not broken?

—