

HOMEWORK WEEK 5

NAME:

CLASS:

- 2 Each of these numbers is exactly divisible by 9. The last digit is hidden. Write the numbers.

a) 426



c) 241



e) 764



b) 158



d) 834

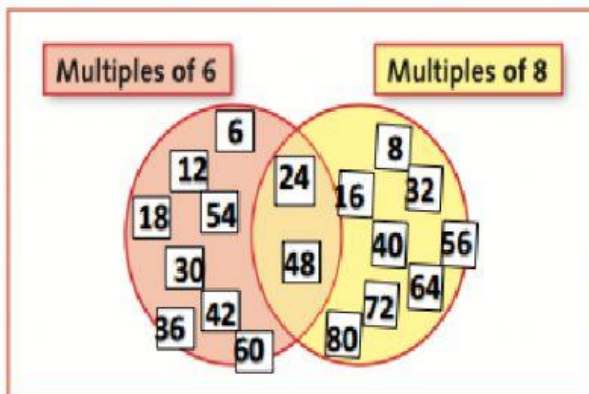


f) 698

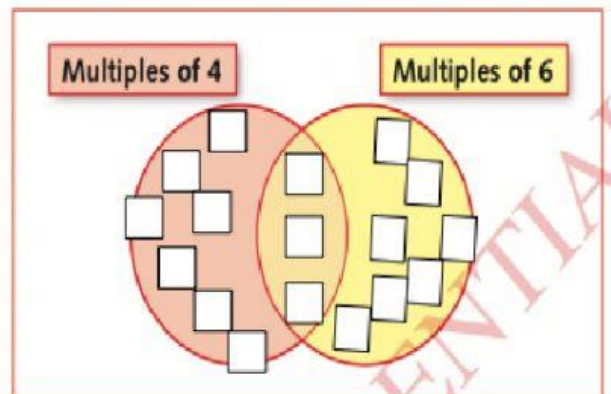


- 6 Write a number in each circle so that the number in each square is the product of the two numbers in the circles on either side.

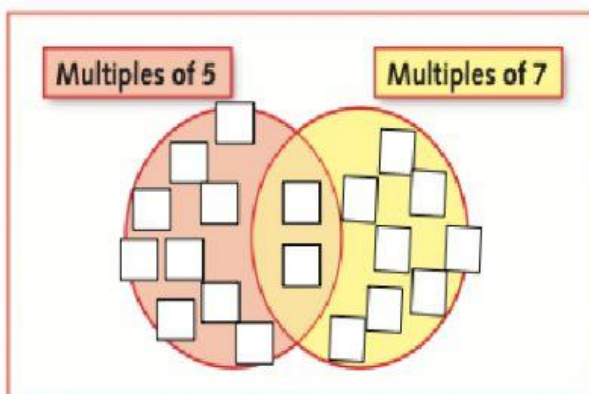
a)



b)



c)



d)

