



Money Practice #3

1. Count by tens.


	25			55				95
105			135			165		


2. Choose ALL the \$1 coins.





3. How many \$10 COINS do you see above? _____ \$10 coins

4. How many coins?

$\$90.00 =$ _____ 

$\$18.00 =$ _____ 

$\$31.00 =$ _____ 

$\$70.00 =$ _____ 

Jamaican Coins


5. Draw a line to match the correct amount of money to each item.



\$10



\$1



\$88.00



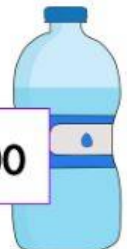
\$15.00



\$24.00



\$101.00



6. How much money do I have?

1  and 8  = \$ _____ . _____

What item could I buy from above?

