


Measuring Length and Height

))) Choose the correct answers.

))) Which hotdog is short?



))) Which pencil is long?




))) Which lighthouse is tall?




))) Which tower is short?




))) Count the paperclips tell the length and the height of each picture.



paperclips tall



paperclips tall



paperclips long



paperclips long