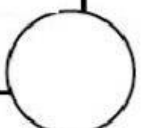

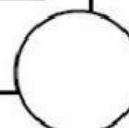
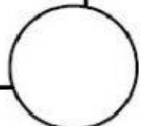
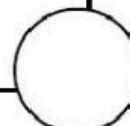
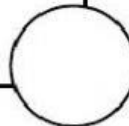
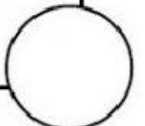
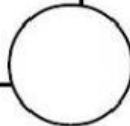
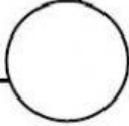




## The uses of magnets

The properties of magnets make them useful to people in many ways.

a. Look at the pictures below carefully and put a tick (✓) to the objects that use magnet.



b. State four (4) other examples of objects that you have at home use magnets.

1. \_\_\_\_\_

2. \_\_\_\_\_

3. \_\_\_\_\_

4. \_\_\_\_\_