

Name \_\_\_\_\_

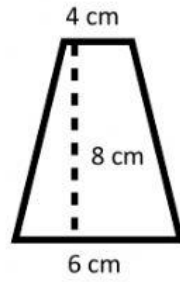
Date \_\_\_\_\_

Year Group \_\_\_\_\_

**Find the area of the trapezoid**

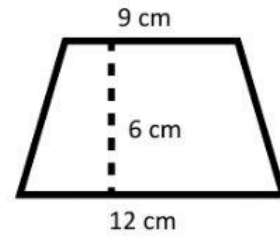
**Put answer in decimal form when necessary**

1.



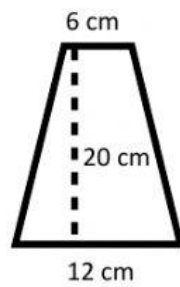
Answer = \_\_\_  $cm^2$

4.



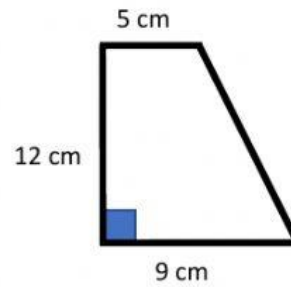
Answer = \_\_\_  $cm^2$

2.



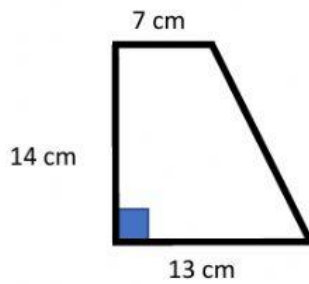
Answer = \_\_\_  $cm^2$

5.



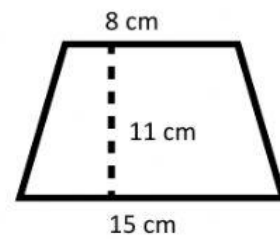
Answer = \_\_\_  $cm^2$

3.



Answer = \_\_\_  $cm^2$

6.



Answer = \_\_\_  $cm^2$