

Name: \_\_\_\_\_

**SCIENCE** Class 2CI \_\_\_\_\_


Date: \_\_\_\_\_

Topic: Unit 4: Light and Dark


**PROGRESS CHECK**

Look at the pictures below.

1. Which of these are light sources?



2. Look and match.



Light gets blocked.

Light reaches the eye.

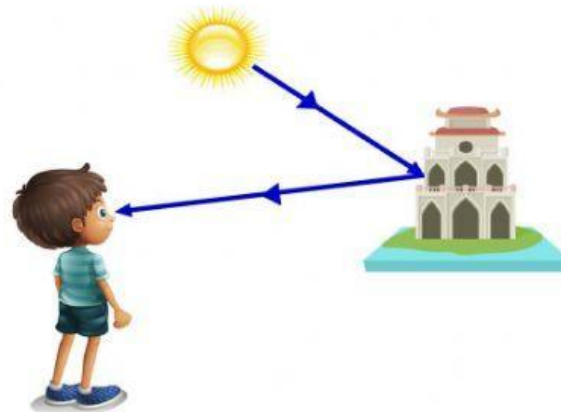


person is able to see the light of the candle.



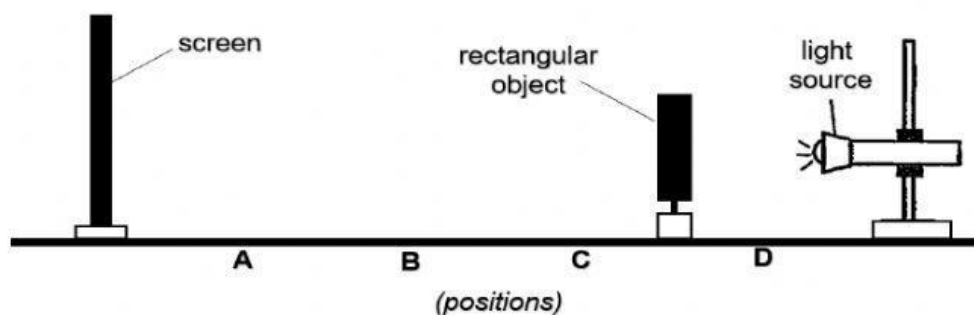
Person not able to see the light of the candle.

3. The picture shows how Minh Khanh sees the tower.



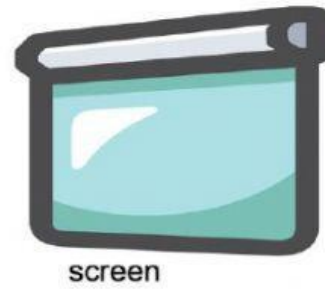
The sun gives off \_\_\_\_\_ and the tower \_\_\_\_\_ the light into Minh Khanh's eyes.

4. Study the set-up below.




At which **position** should the **object** be placed so that it would cast the **tallest** shadow on the screen?


5. Phuc Minh placed 2 puppets between a torch and a big screen.



The 2 puppets are of the same height, as shown below.



The shadows cast on the screen are as shown below.



Which puppet, A or B, is placed **closer** to the torch?

\_\_\_\_\_