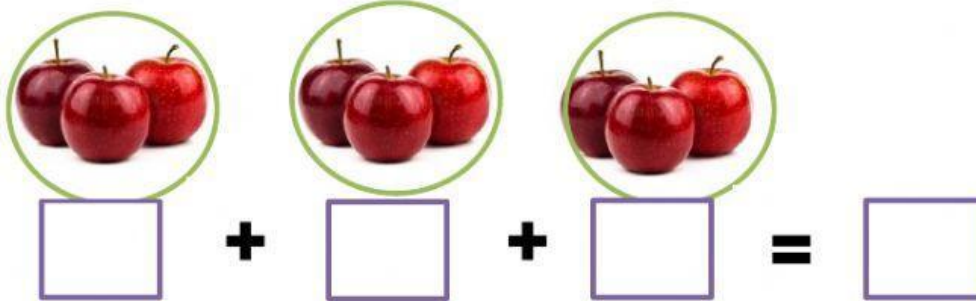



LA MULTIPLICACIÓN COMO SUMAS ITERADAS

1.- Realiza las siguientes sumas repetidas, y luego escribe la multiplicación.



x =




+ + + =

x =




+ =

x =



$$\square + \square + \square = \square$$

$$\square \times \square = \square$$



$$\square + \square + \square + \square + \square + \square = \square$$

$$\square \times \square = \square$$



$$\square + \square + \square + \square + \square = \square$$

$$\square \times \square = \square$$

