

## What's My Name?

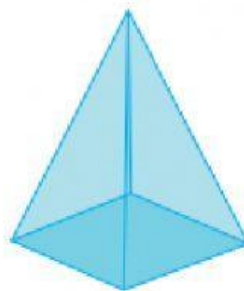
Identify the solid shapes choosing their names from the word box.

1)



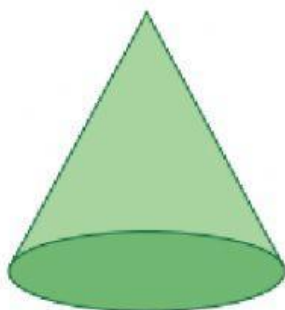
\_\_\_\_\_

2)



\_\_\_\_\_

3)



\_\_\_\_\_

4)



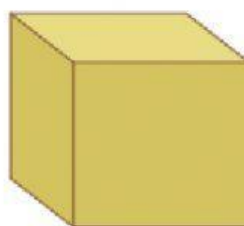
\_\_\_\_\_

5)



\_\_\_\_\_

6)



\_\_\_\_\_

cylinder

sphere

cone

rectangular prism

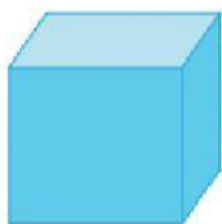
pyramid

cube

## Identifying 2D & 3D Shapes

Identify each shape as 2D or 3D, and check the appropriate box.

1)



☐ 2D

☐ 3D


2)



☐ 2D

☐ 3D

3)



☐ 2D

☐ 3D

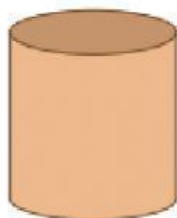
4)



☐ 2D

☐ 3D


5)



☐ 2D

☐ 3D


6)



☐ 2D

☐ 3D


7)



☐ 2D

☐ 3D

8)



☐ 2D

☐ 3D