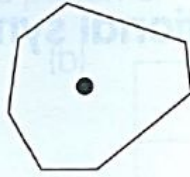
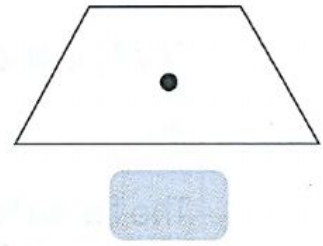


1) Circle the figures that have rotational symmetry.



2) Tick (✓) the figure that fits exactly onto itself **only twice** during a complete turn.



3) State the order of rotational symmetry for each shape below.

a



b




c



d



e



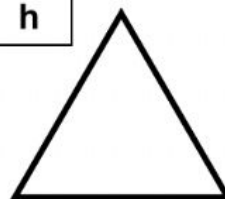
f




g



h




i



j



k



l

