


## Addition Word Problems Practice

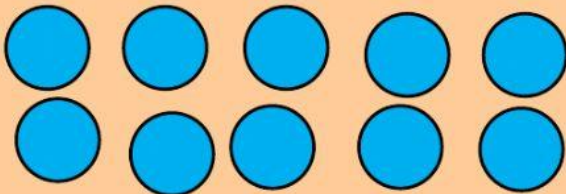
**Instructions:** Read the word problems and solve. Drag the circles to represent the numbers.

a. Sam has 5 toys. He got 2 more. How many toys does he have in all?



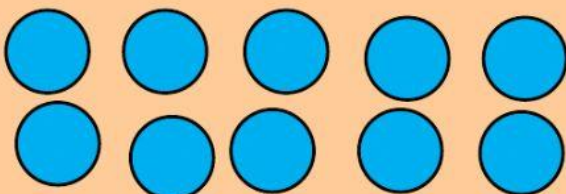
$$\underline{\quad} + \underline{\quad} = \underline{\quad}$$

b. The girl has 4 dolls. Her mom gave her 2 more dolls. How many dolls does she have altogether?



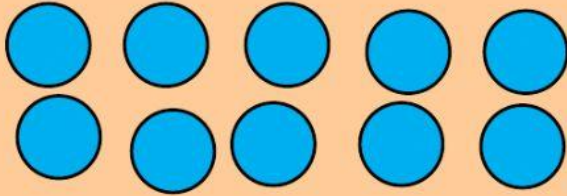
$$\underline{\quad} + \underline{\quad} = \underline{\quad}$$

c. My teacher has 5 boys and 5 girls in her class. What is five plus five?



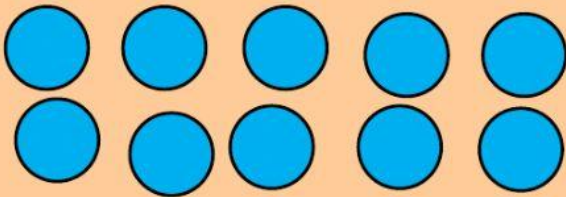
$$\underline{\quad} + \underline{\quad} = \underline{\quad}$$

d. The boys have 7 pencils and the girls have 2 pencils. How many pencils are there in total?



$$\underline{\quad\quad} + \underline{\quad\quad} = \underline{\quad\quad}$$

e. There are 6 dogs in the park. 4 more dogs came to the park. How many dogs are there in all?



$$\underline{\quad\quad} + \underline{\quad\quad} = \underline{\quad\quad}$$