

CHAPTER - WATER

I. Drag and drop the following methods of obtaining underground water:

Well

Tube-well

Step-well





Hand-pump



II. Match the correct description for the following process in the water treatment plant:

Column A	Column B
1. Rain water is sent to the _____ tank to remove the impurities.	<u>storage tank</u>
2. The top layer of water is sent to the _____ tank without disturbing the settled solids to remove the very fine dirt particles.	<u>loading tank</u>
3. Water is disinfected in the _____ tank where chlorine kills germs present in water.	<u>filtration tank</u>
4. Alum is added to settle down suspended impurities in _____ tank.	<u>chlorination tank,</u>
5. Purified water is stored in a big _____ tank and then supplied to the city through big pipes.	<u>sedimentation tank</u>

III. Match the following methods of irrigation to the correct picture:

Column A	Column B
1. Furrow irrigation	
2. Tank	
3. flood irrigation	
4. Sprinkler irrigation	
5. canal	