


WORKSHEET

Exercise: Look at the pictures and tick the correct answers.


1, How many apples?



thirteen

nine


2, How many rulers?



fourteen

ten

3. How many hats?



thirteen

fifteen

4, How many cats?



ten

twelve

5, How many rabbits?



eleven

fifteen

6, How many dogs?



fourteen

twelve