




Name _____


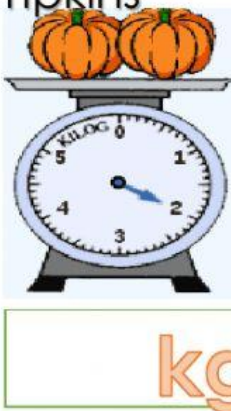
Class2/

No. _____

Fill in the correct answer.



pumpkins



Use the word below to fill in the blanks.

heavier heaviest lighter lightest

1. The mango is _____ than the papaya.
2. The grapes are _____ than the mango.
3. The bananas are the _____.
4. The Mango is the _____.

Matching the correct answer.

1. 2 kilograms.

A. 1 kilograms

2. 4 kilograms.

B. 2,000 grams

3. 5000 grams.

C. 4,000 grams

4. 1000 gams.

D. 5 kilograms

Fill in the correct answer

$$\begin{array}{r} 1. \quad \text{Kg} \quad \text{g} \\ 18 \quad 350 \\ + 5 \quad 120 \\ \hline \end{array}$$

$$\begin{array}{r} 2. \quad \text{Kg} \quad \text{g} \\ 25 \quad 793 \\ - 13 \quad 635 \\ \hline \end{array}$$

3. John had 200 grams of rice. He cooked 70 grams of it. How much rice did he have left?

Answer: grams.

4. Father bought 7 kilograms of apples, 12 kilograms of bananas and 14 kilograms of cherries. What was the total mass of the fruits he bought?

Answer: kilograms.