

Name :

Quarter 1

Grade 7:

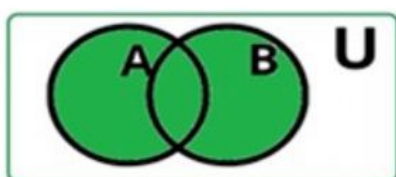
Date :

Activity : Set Operations and Venn Diagrams

Direction: Use the live worksheet pen to connect the correct pair. They have to be connected with a straight line.

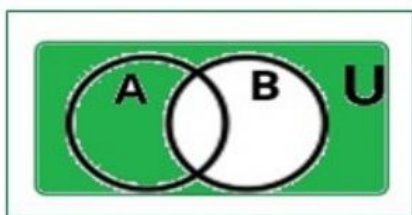
What set operation is illustrated by the shaded region in the following Venn diagrams?

1.



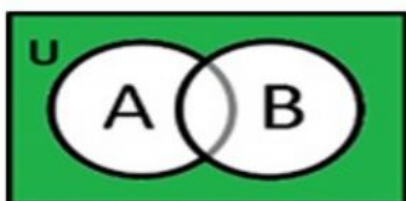
B'

2.



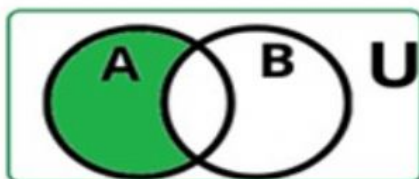
$A \cup B$

3.



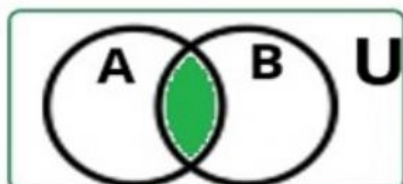
$A \cap B$

4.



$A - B$

5.



$(A \cup B)'$

Prepared by : Wilma B. Cristobal