

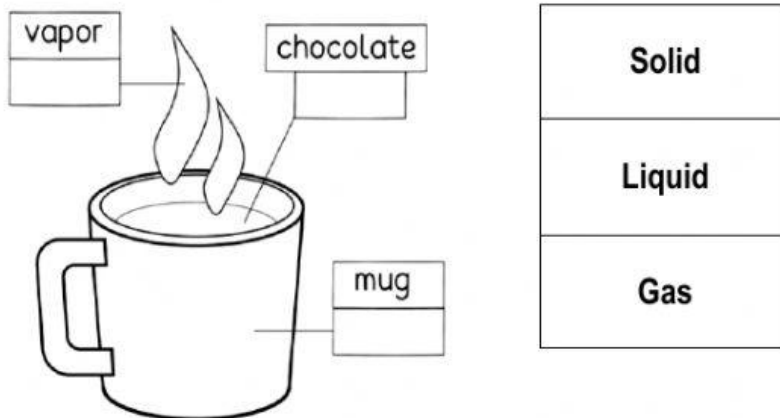
Science SC21101 Quiz

MEP 1/9

Name: _____ Student no. _____ Class: MEP1/9

Unit 4: State of Matter

Part 1: Identify the phases of matter.



Part 2: Write each item in correct column.

 Paper	 Water vapor	 Shampoo	 Cotton	 Soda
 Hot air	 Soda can	 Carrot	 Syrup	

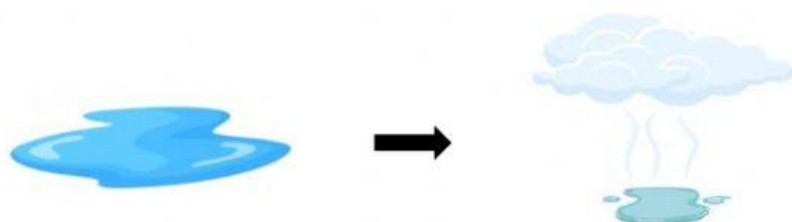
Solid	Liquid	Gas

Part 3: Fill in the blanks with heated or cooled.

Ice changes into water when it is _____.



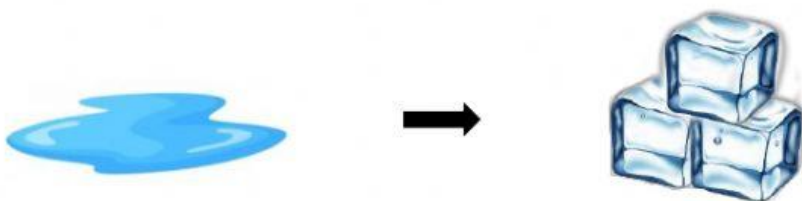
Water changes to water vapor when it is _____.



Water vapor changes into water when it is _____.



Water changes to ice when it is _____.



Part 4: Fill in the blanks.

water vapor	solid	ice
heated	liquid	gas



Water turns to _____ when it freezes.

It turns from a _____ to a solid.



When water is heated enough, it becomes _____.

It turns from a liquid to a _____.



When ice is _____ it turns to water.

Ice changes from a _____ to a liquid.