

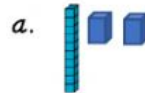
Name: _____ Date: _____

Place Value Tens and Ones

Match the number to the correct picture representation.

Example:

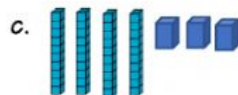
1. 58 b




2. 43



3. 12



4. 41



Write the digit in the correct column to tell how many tens and how many ones are in the numbers.

5. 65	Tens	Ones

6. 97	Tens	Ones