

THE BRITISH ISLES

❖ Drag the names of the countries and capitals in the right boxes.



SCOTLAND	ENGLAND	NORTHERN IRELAND	THE REPUBLIC OF IRELAND	WALES
Dublin	Edinburgh	London	Cardiff	Belfast

❖ Select the right legend for each map and complete the text.








The _____ is composed of England, Scotland, Wales and Northern Ireland. It is governed by the Queen of England. You pay in sterling pounds.

The _____ is part of the European Union. You pay in euro.


.....

.....

❖ Fill in the chart:

		
country:	country:	country:
nationality:	nationality:	nationality:
		
country:	country:	country:
nationality:	nationality:	nationality:

❖ Write the name of the British flag in the box below:



This flag is made with 3 other flags... Drag them into the chart.

Irish	Scottish	English

