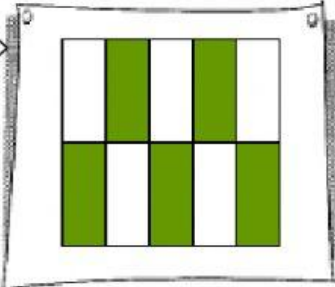
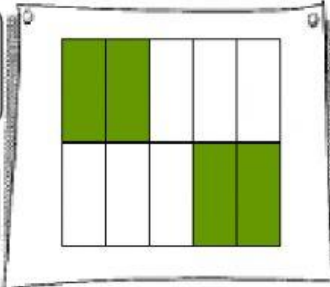
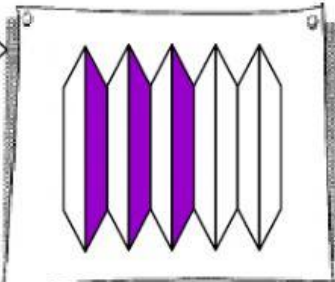
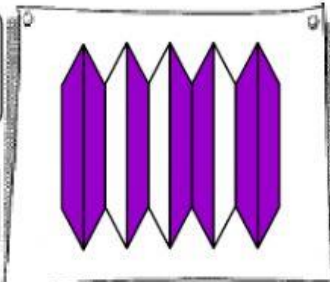



COMPARE FRACTIONS AND DECIMALS


A. Compare and write 'larger than' or 'smaller than'


1.  $\frac{5}{10}$  0.4


2.  $\frac{3}{10}$  0.7

B. Choose the smaller value.

1. 0.7  $\frac{9}{10}$

2. $\frac{6}{10}$  0.3

3. $\frac{2}{10}$  0.5

4. $\frac{9}{10}$  0.8

C. Choose the correct answer.

1. $\frac{2}{10}$, $\frac{4}{10}$ is larger than 0.3

2. 0.5, 0.8 is smaller than $\frac{7}{10}$

3. $\frac{9}{10}$, $\frac{6}{10}$ is smaller than 0.8

4. 0.5, 0.1 is larger than $\frac{3}{10}$