


Fill in the blanks with the correct time.
Check by drawing the hands of the clock as shown.

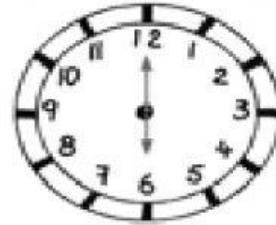
Example



5.00

Start

1 h
Duration



6.00

End

(a)



11.00


Start

2 h
Duration



End

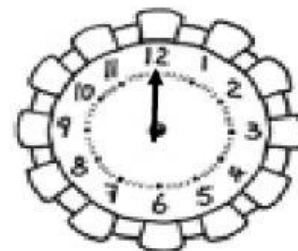
(b)



8.00

Start

5 h
Duration



End

4. Fill in the blanks with the correct time.
Check by drawing the hands of the clock as shown.


Example



1.30

Start

30 min
Duration



2.00

End

(a)



Start

15 min
Duration



End

(b)



Start

20 min
Duration



End