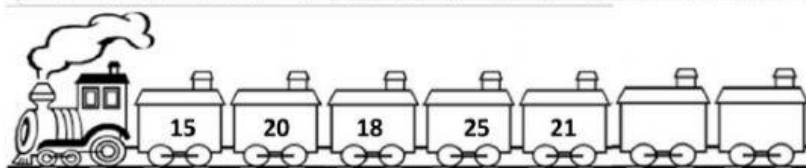
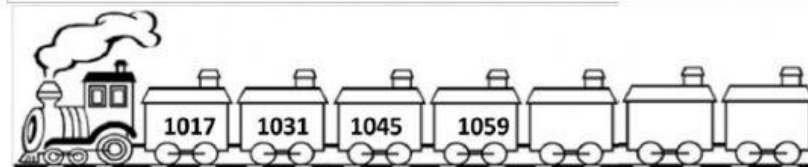





## Realiza las siguientes operaciones

a)	3000	+	100	=
b)	300	—	49	=
c)	40	X	2	=
d)	300	/	5	=
e)	210	/	3	=
f)	3.7	+	2	=
g)	5.6	—	1	=
h)	6	+	2.9	=
i)	620	/	10	=
j)	35	para	100	=

Completa las siguientes series



Dibuja en tu cuaderno la figura 8



Figura 1




Figura 2




Figura 3




Figura 4